

GLASBENA ŠOLA RAVNE NA KOROŠKEM

NAUK O GLASBI - 1. RAZRED

DATUM: _____



PREVERJANJE ZNANJA

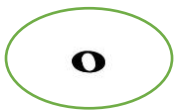

1. TONOM ZAPIŠI IMENA:

S TONSKO ABECEDO

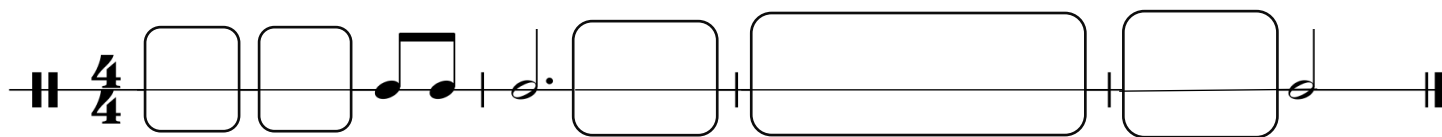
S SOLMIZACIJSKIMI ZLOGI

A musical staff with a treble clef. The first four notes are quarter notes on G4, F4, E4, and D4. The fifth note is a quarter note on C4, followed by a double bar line. The sixth note is a quarter note on D4, the seventh is a quarter note on E4, and the eighth is a quarter note on F4. Below each note is a large empty circle for labeling. A bracket above the staff connects the text 'S SOLMIZACIJSKIMI ZLOGI' to the notes from the fifth measure onwards.

2. POVEŽI NOTO Z USTREZNO PAVZO.



3. Z NOTNIMI VREDNOSTMI IN PAVZAMI DOPOLNI RITMIČNO VAJO V ŠTIRIČETRTINSKEM TAKTU.



4. ZAPIŠI REŠITEV Z USTREZNO ČRKO.

A	HARMONIKA		GODALO
B	KITARA		PIHALO
C	VIOLINA		INSTRUMENT S TIPKAMI
D	KLJUNASTA FLAVTA		BRENKALO

